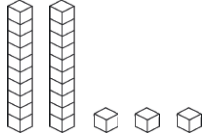

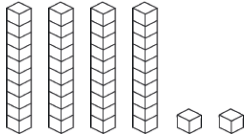
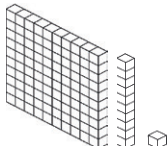


# Reading and Writing Numbers to 100 Worksheet

Can you fill out any missing boxes for each of the numbers below? The first one has been done for you to show you what to do.

Numerals	Number in Words	Tens	Ones	Illustration
23	twenty-three	2	3	
17	seventeen			
34				
	fifty-six	5	6	
		5	1	
49				
	eighty three			
				
		7	7	

## Challenge

Numerals	Number in Words	Hundreds	Tens	Ones	Illustration
					

# Reading and Writing Numbers to 100 Worksheet - ANSWERS

Can you fill out any missing boxes for each of the numbers below? The first one has been done for you to show you what to do.

Numerals	Number in Words	Tens	Ones	Illustration
23	twenty-three	2	3	
17	seventeen	1	7	
34	<b>thirty-four</b>	<b>3</b>	<b>4</b>	
<b>56</b>	ifty-six	5	6	
<b>51</b>	<b>ifty-one</b>	5	1	
49	<b>forty-nine</b>	<b>4</b>	<b>9</b>	
<b>83</b>	eighty-three	<b>8</b>	<b>3</b>	
<b>42</b>	<b>forty-two</b>	<b>4</b>	<b>2</b>	
<b>77</b>	<b>seventy-seven</b>	<b>7</b>	<b>7</b>	

## Challenge

Numerals	Number in Words	Hundreds	Tens	Ones	Illustration
111	<b>one hundred and eleven</b>	1	1	1	